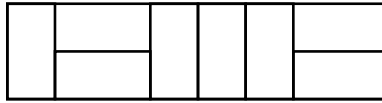
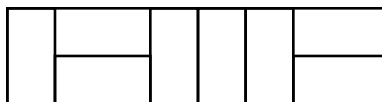


Problem 1. A $2 \times N$ room is tiled with small rectangles of size 1×2 . An example of tiling is given in the picture below. If $N = 8$, in how many ways can you tile the room?



ANSWER:

Problem 1. A $2 \times N$ room is tiled with small rectangles of size 1×2 . An example of tiling is given in the picture below. If $N = 8$, in how many ways can you tile the room?



ANSWER:

PROBLEM No.1

NAME

ID

--	--	--	--


PROBLEM No.1

NAME

ID


--	--	--	--

Problem 2. Four identical dice are stacked like on the picture below. The internal dice show four faces and the boundary ones five. What is the sum of the dots on the 18 visible faces? Recall that on a dice, opposite sides add up to 7.



ANSWER:

Problem 2. Four identical dice are stacked like on the picture below. The internal dice show four faces and the boundary ones five. What is the sum of the dots on the 18 visible faces? Recall that on a dice, opposite sides add up to 7.



ANSWER:

PROBLEM No.2

NAME

ID

--	--	--	--

PROBLEM No.2

NAME

ID

--	--	--	--

Problem 3. Two points in the plane have integer coordinates and the distance between them is $\sqrt{65}$. If these points form the opposite corners of a rectangle whose sides are parallel to the coordinate axes, what is the maximal area of such a rectangle.

ANSWER:

Problem 3. Two points in the plane have integer coordinates and the distance between them is $\sqrt{65}$. If these points form the opposite corners of a rectangle whose sides are parallel to the coordinate axes, what is the maximal area of such a rectangle.

ANSWER:

PROBLEM No.3

NAME

ID

--	--	--	--

PROBLEM No.3

NAME

ID

--	--	--	--

Problem 4. What is the remainder of the following integer division?

$$\frac{1000^4 + 1001^4 + 1002^4 + \cdots + 2023^4}{16}$$

ANSWER:

Problem 4. What is the remainder of the following integer division?

$$\frac{1000^4 + 1001^4 + 1002^4 + \cdots + 2023^4}{16}$$

ANSWER:

PROBLEM No.4

NAME

ID

--	--	--	--

PROBLEM No.4

NAME

ID

--	--	--	--

Problem 5. In the expression below, a,b and c represent digits. If

$$0.2a \times 7.b = 2.c,$$

what is $a \times b \times c + a + b + c$?

ANSWER:

Problem 5. In the expression below, a,b and c represent digits. If

$$0.2a \times 7.b = 2.c,$$

what is $a \times b \times c + a + b + c$?

ANSWER:

PROBLEM No.5

NAME

ID

--	--	--	--

PROBLEM No.5

NAME

ID

--	--	--	--

Problem 6. What is the last digit of M ?

$$M = 1! + 2! + 3! + \cdots + 2023!$$

ANSWER:

Problem 6. What is the last digit of M ?

$$M = 1! + 2! + 3! + \cdots + 2023!$$

ANSWER:

PROBLEM No.6

NAME

ID

--	--	--	--

PROBLEM No.6

NAME

ID

--	--	--	--

Problem 7. Find the integer a that satisfies

$$a!(a + 1)! = 10!$$

ANSWER:

Problem 7. Find the integer a that satisfies

$$a!(a + 1)! = 10!$$

ANSWER:

PROBLEM No.7

NAME

ID

--	--	--	--

PROBLEM No.7

NAME

ID

--	--	--	--

Problem 8. How many triangles have sides of length π , $\sqrt{2}$ and a where the latter is an integer? (the order of the sides is irrelevant)

ANSWER:

Problem 8. How many triangles have sides of length π , $\sqrt{2}$ and a where the latter is an integer? (the order of the sides is irrelevant)

ANSWER:

PROBLEM No.8

NAME

ID

--	--	--	--

PROBLEM No.8

NAME

ID

--	--	--	--

Problem 9. Everytime a frog jumps, it makes a 1 foot leap in an arbitrary direction in the plane. What is the probability that after 2 leaps, the frog is within 1 foot from its starting position?

ANSWER:

Problem 9. Everytime a frog jumps, it makes a 1 foot leap in an arbitrary direction in the plane. What is the probability that after 2 leaps, the frog is within 1 foot from its starting position?

ANSWER:

PROBLEM No.9

NAME

ID

--	--	--	--

PROBLEM No.9

NAME

ID

--	--	--	--

Problem 10. If the integers a , b , c and d are such that

$$2^a 3^b 5^c 7^d - 77 = 2023,$$

what is $a + b + c + d$?

ANSWER:

Problem 10. If the integers a , b , c and d are such that

$$2^a 3^b 5^c 7^d - 77 = 2023,$$

what is $a + b + c + d$?

ANSWER:

PROBLEM No.10

NAME

ID

--	--	--	--

PROBLEM No.10

NAME

ID

--	--	--	--

UGA High School Math Tournament 2023
Speed Round

Do not open this booklet!
Flip it over.

UGA High School Math Tournament 2023
Speed Round

Do not open this booklet!
Flip it over.