

Problem 1. Ted and Valery's ages add up to 35. If Ted is twice as old as Valery was 5 years ago, how old is Ted?

Problem 1. Ted and Valery's ages add up to 35. If Ted is twice as old as Valery was 5 years ago, how old is Ted?

Problem 2. Suppose you know $|x - 2| \leq 1$. What is the largest possible value of $|x^2 - 4|$?

Problem 2. Suppose you know $|x - 2| \leq 1$. What is the largest possible value of $|x^2 - 4|$?

Problem 3. Find all real values of x that satisfy the equation

$$e^x + 1 = 12e^{-x}$$

Problem 3. Find all real values of x that satisfy the equation

$$e^x + 1 = 12e^{-x}$$

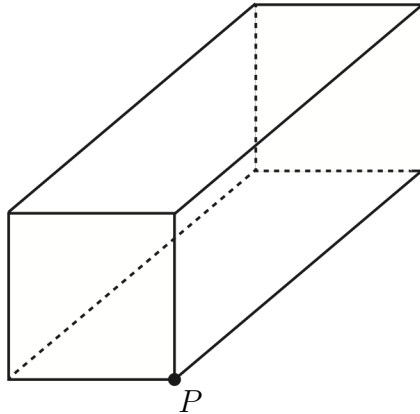
Problem 4. Paul took 1 minute to solve the first problem on an 8 question math test, and each successive problem took twice as long as the preceding problem. Assuming he took a 1 minute break between problems, how long did it take Paul to complete the test?

Problem 4. Paul took 1 minute to solve the first problem on an 8 question math test, and each successive problem took twice as long as the preceding problem. Assuming he took a 1 minute break between problems, how long did it take Paul to complete the test?

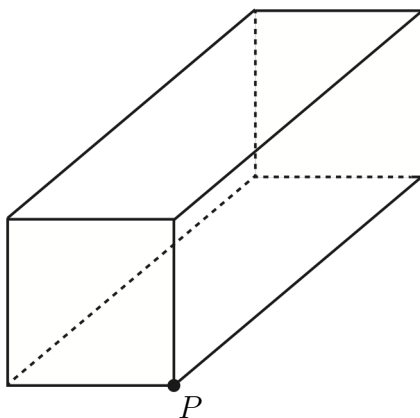
Problem 5. Find the smallest integer k greater than 1 such that k divided by i has remainder 1 for all i in the set $\{2, 3, 4, 5, 6, 7, 8\}$.

Problem 5. Find the smallest integer k greater than 1 such that k divided by i has remainder 1 for all i in the set $\{2, 3, 4, 5, 6, 7, 8\}$.

Problem 6. We define the distance between two points on the surface of a $1 \times 1 \times 2$ rectangular box to be the length of the shortest path (on the surface of the box) which joins them. With this definition, the circle of radius 1 centered at P is the set of all points which are a distance of 1 from P . What is the circumference of this circle?



Problem 6. We define the distance between two points on the surface of a $1 \times 1 \times 2$ rectangular box to be the length of the shortest path (on the surface of the box) which joins them. With this definition, the circle of radius 1 centered at P is the set of all points which are a distance of 1 from P . What is the circumference of this circle?



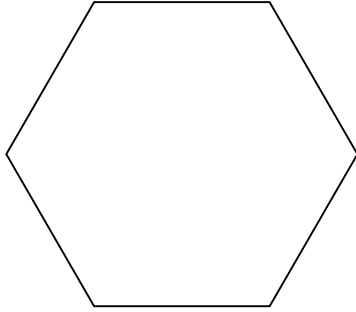
Problem 7. Find the sum of the solutions of

$$x^4 - 76x^3 + 962x^2 - 2900x + 2013 = 0$$


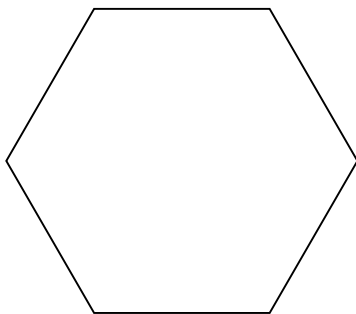
Problem 7. Find the sum of the solutions of

$$x^4 - 76x^3 + 962x^2 - 2900x + 2013 = 0$$

Problem 8. If three vertices of a regular hexagon are chosen at random, what is the probability that they are the vertices of a right triangle?



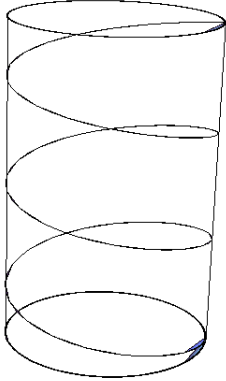
Problem 8. If three vertices of a regular hexagon are chosen at random, what is the probability that they are the vertices of a right triangle?



Problem 9. How many degree 4 monomials are there in the variables w, x, y, z ?
A degree 4 monomial is a term $w^a x^b y^c z^d$ such that a, b, c and d are integers with $0 \leq a, b, c, d \leq 4$ and $a + b + c + d = 4$.

Problem 9. How many degree 4 monomials are there in the variables w, x, y, z ?
A degree 4 monomial is a term $w^a x^b y^c z^d$ such that a, b, c and d are integers with $0 \leq a, b, c, d \leq 4$ and $a + b + c + d = 4$.

Problem 10. A string will wrap around the base of a certain cylinder exactly 5 times. If instead the same string spirals tightly to the top, it goes around the cylinder exactly 3 times. If the radius of the cylinder is 1, what is the height of the cylinder? Your answer should be written as an integral multiple of π .



Problem 10. A string will wrap around the base of a certain cylinder exactly 5 times. If instead the same string spirals tightly to the top, it goes around the cylinder exactly 3 times. If the radius of the cylinder is 1, what is the height of the cylinder? Your answer should be written as an integral multiple of π .

